


Name: _____

Date: _____


Fish Addition

3 + 6 =



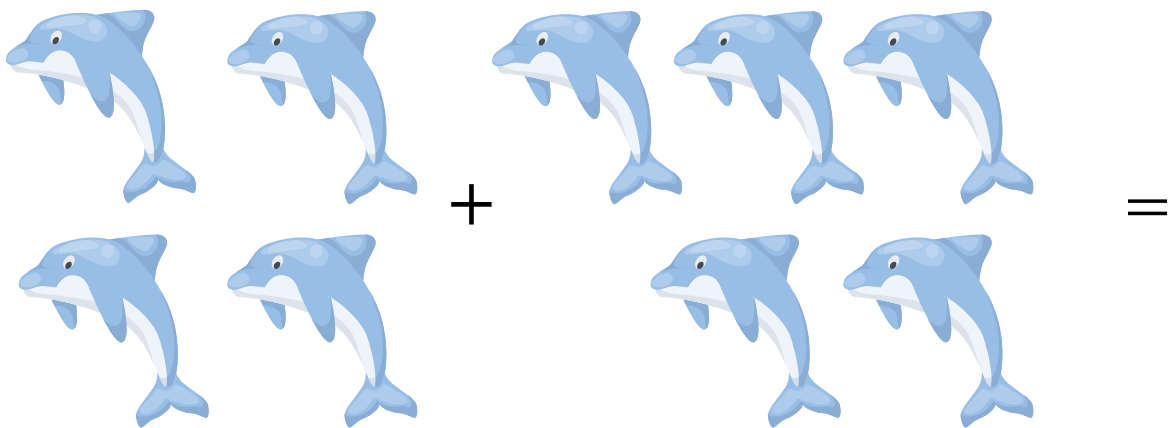
A visual addition problem featuring clownfish. On the left, the number '3' is positioned above three clownfish. In the middle, a plus sign is followed by the number '6' above six clownfish. To the right of the six clownfish is an equals sign. All clownfish are orange with white stripes.

2 + 1 =




A visual addition problem featuring blue fish. On the left, the number '2' is positioned above two blue fish. In the middle, a plus sign is followed by the number '1' above one blue fish. To the right of the one blue fish is an equals sign. All blue fish are blue with yellow fins.

4 + 5 =



A visual addition problem featuring dolphins. On the left, the number '4' is positioned above four dolphins. In the middle, a plus sign is followed by the number '5' above five dolphins. To the right of the five dolphins is an equals sign. All dolphins are blue.

1 + 2 =



A visual addition problem featuring whales. On the left, the number '1' is positioned above one whale. In the middle, a plus sign is followed by the number '2' above two whales. To the right of the two whales is an equals sign. All whales are blue.